

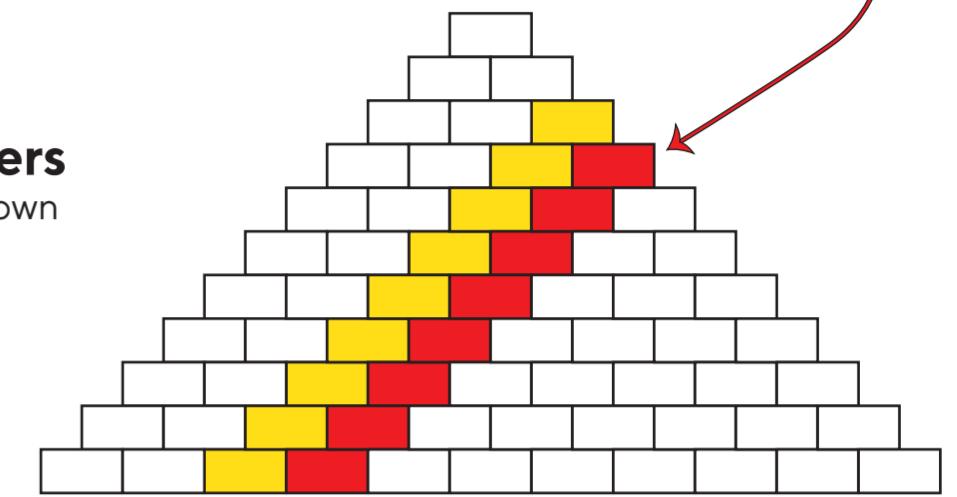
Al-Karaji's Triangle

Who knew!

Within this simple triangle lay many, many mathematical wonders. Here are just a few....

The Tetrahedral Numbers

In the red bricks live the tetrahedral numbers. Can you draw the pattern they make?




The Triangular Numbers

If you follow the yellow bricks down through each layer, it reveals the triangular numbers.

Do you know why they are called the triangular numbers?

Take a look at this pattern.



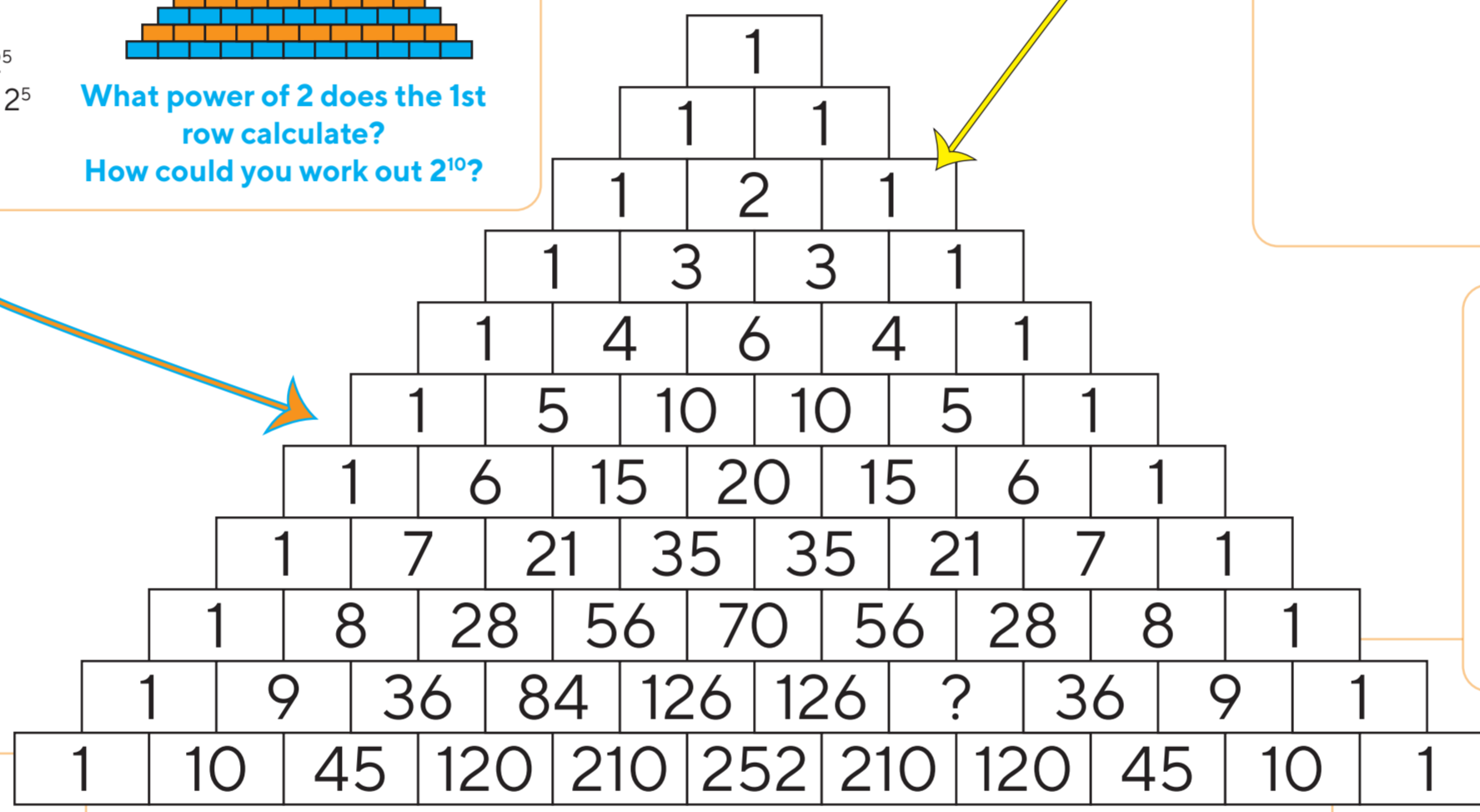
The Persian mathematician **Al-Karaji** wrote a book detailing the first formulation of this triangle in the 10th century. Other mathematicians from different cultures have also written about this triangle, including the Persian mathematician **Omar Khayyam** and Chinese mathematician **Jia Xian** in the 11th century. In Western culture, **Blaise Pascal** was the French Mathematician whom this triangle is often named after. With 1s in all the bricks on the sloping sides, all other bricks are the sum of the two bricks which touch its upper edge. **What value should be in the ? brick?**

The Powers of Two

If you calculate the total of each row a special set of numbers is revealed.

The 6th row calculates 2^5
 $1 + 5 + 10 + 10 + 5 + 1 = 32 = 2^5$

What power of 2 does the 1st row calculate?
 How could you work out 2^{10} ?



Hexagons

Calculate the product of the alternating vertices of any hexagon within Al-Karaji's Triangle.

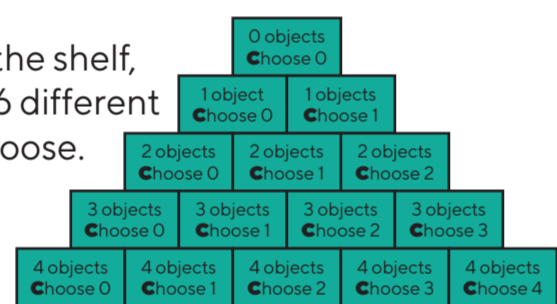
$6 \times 5 \times 20 = ?$
 $4 \times 15 \times 10 = ?$

Anything interesting?

Combinatorics

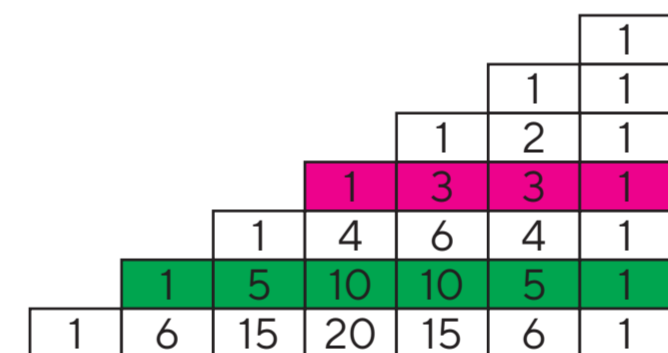
If we have a set of objects and you wish to choose a certain number of them, this triangle tells you how many possible ways there are to do this.

E.g. if you have 4 books on the shelf, I blindly pick any 2, there are 6 different pairs of books I could choose.



If you have 6 books and wish to choose 3 of them, how many different combinations are there?

10^6 10^5 10^4 10^3 10^2 10^1 10^0



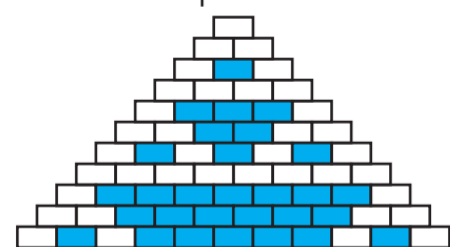
The Powers of Eleven

Right align the bricks in the triangle. Each row gives you a power of 11... $11^0 = 1, 11^1 = 11, 11^2 = 121$ etc..

What is 11^3 ?
 Can you figure out 11^5 ? Be careful!


Multiples

If you shaded all the multiples of 2



What patterns do you create with other multiples? Try 4, 5, 6, 7,

If you shaded all the multiples of 3



Binomials

An algebraic expression with 2 parts is called a binomial. If raised to different integer (whole number) powers, we can use Al-Karaji's triangle to help us determine the coefficients.

$$(x + y)^0 = 1$$

$$(x + y)^1 = 1x + 1y$$

$$(x + y)^2 = 1x^2 + 2xy + 1y^2$$

$$(x + y)^3 = 1x^3 + 3x^2y + 3xy^2 + 1y^3$$

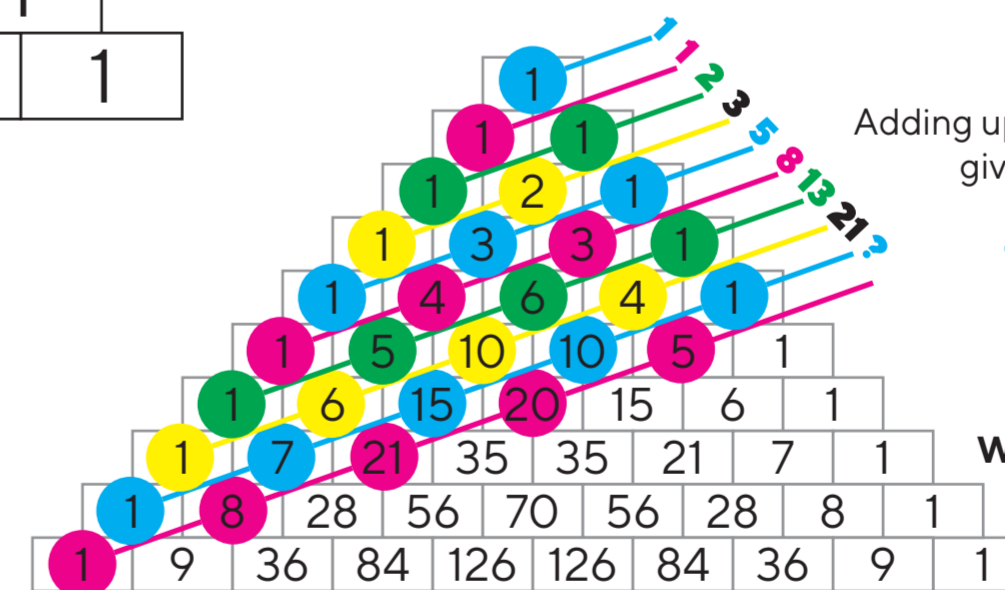
$$(x + y)^4 = 1x^4 + __ + __ + __ + 1y^4$$

Can you expand the binomial to the power of 4 using the triangle to help you?

Fibonacci

Adding up along these coloured diagonals gives you the numbers in the Fibonacci sequence

1, 1, 2, 3, 5, 8, 13, 21, ...



What's next? Is there any other way to determine the next number?

There is more to Mathematics than you think.... visit rhgmc-mspw.cymru to find out more.

Level 2 Additional Maths can be studied during key stage four.

In key stage five A Level Mathematics is the most popular¹ A-level and A Level Further Mathematics is the perfect accompaniment.

The Mathematics Support Programme Wales (MSPW) is here to support students, teachers and departments across Wales in enriching and developing their Mathematical domain across all key stages.

Enrichment + Professional Learning + Tuition + Resources + Research



[youtube.com/c/RhGMBCFMSPW](https://www.youtube.com/c/RhGMBCFMSPW)

rhgmc-mspw@swansea.ac.uk

[@RhGMC_MSPW](https://twitter.com/RhGMC_MSPW)



Rheolir gan Brifysgol Abertawe, Selyddiad Gwyddorau Cyfrifiadurol a Mathemategol Cymru
 Managed by Swansea University, Wales Institute of Mathematical and Computational Sciences



rhgmc-mspw.cymru

Trigonometry

The word **trigonometry** has evolved from **trigonon** meaning three (tri) angles (gon) and **metria** meaning to measure.

Imagine
If we take this right angled triangle and enlarge it and shrink it, to lots of different sizes, keeping all the sides in proportion....

What do you notice?
Did you spot all the angles stayed the same.

A Different Angle...?
If we change the size of the original angle in the triangle, and do some more enlargements, again the angle stays the same in all of the new triangles we create.

Give them a name!
Naming the sides, depending on where they are in relation to the angle, helps us to calculate things.

In each of these three triangles, divide the Opposite by the Hypotenuse.

$\frac{8}{12} = \frac{2}{3}$ $\frac{5}{7.5} = \frac{2}{3}$ $\frac{10}{15} = \frac{2}{3}$

In each of these three triangles, divide the Adjacent by the Hypotenuse.

$\frac{12}{15} = \frac{4}{5}$ $\frac{4}{5}$ $\frac{6}{7.5} = \frac{4}{5}$

So
When the angle stays the same, all the sides stay in the same proportions.

To 360° and beyond
We can continue to increase the angle and move the triangle around the origin, if we continue to plot the height of the triangle the graph below is drawn.

What do you think happens as the angle exceeds 360°?

The Sine Wave **sin** **cos** **tan**

This function is called the Sine function (shortened to **sin**). It carries on forever, as you continue around and around the circle. Luckily we have a button on the calculator which stores this graph and determines it's values when we need them.

If Sine, relates to the opposite and hypotenuse sides, how do you think Cos(ine) and Tan(gent) are related?

Bigger than 90°
If we draw our triangles in a unit circle, (often, in maths **unit** is a word used for 1, so a **unit circle** has a radius of 1). As the hypotenuse is 1, the height of the triangle represents the ratio of the opposite and hypotenuse. If we define the angle as always being measured from the positive horizontal axis we can move the triangle around the origin.

As the angle gets closer to 90°, the height of the triangle cannot exceed 1.

For any given angle
The ratio of any two sides is always the same. This is because when the angle is fixed we know all the triangles are similar, and therefore sides must be in proportion.
When we find the ratio of any two sides for a fixed angle, we will always get the same answer. If we change the angle the ratio will change.

Let's plot it
If we draw a graph of the different angles on the horizontal axis and the ratio of the opposite and hypotenuse on the vertical axis, we get:

As the angle gets closer to 90°, the ratio seems to get no higher than 1.

What do you think happens to the graph with angles over 90°? Would it still be a right angled triangle?

There is more to Mathematics than you think.... visit rhgmc-mspw.cymru to find out more.
Level 2 Additional Maths can be studied during key stage four.
In key stage five **A Level Mathematics** is the most popular¹ A-level and **A Level Further Mathematics** is the perfect accompaniment.

The Mathematics Support Programme Wales (MSPW) is here to support **students, teachers** and **departments** across Wales in enriching and developing their Mathematical domain across all key stages.

Enrichment + Professional Learning + Tuition + Resources + Research



[youtube.com/c/RhGMBFCMSPW](https://www.youtube.com/c/RhGMBFCMSPW)

rhgmc-mspw@swansea.ac.uk

[@RhGMC_MSPW](https://twitter.com/RhGMC_MSPW)



Rheolir gan Brifysgol Abertawe, Selyddiad Gwyddorau Cytrifadurol a Mathemategol Cymru
Managed by Swansea University, Wales Institute of Mathematical and Computational Sciences



rhgmc-mspw.cymru

Α Β Γ Δ Ε Ζ Η Θ Ι Κ Λ Μ Ν Ξ Ο Π Ρ Σ Τ Υ Φ Χ Ψ Ω

Quadrare

Quadrare

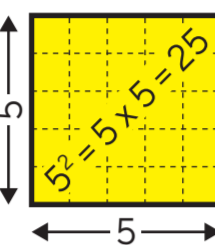
Is a Latin word meaning 'to make square', it's where the words **quadratics**, **quadrangle**, **quadrilateral**, **quadriceps**... come from.
Can you think of any more quad words?

Not everything is perfect

Just like in the real world, not everything in maths can be perfect - although much of maths is pretty good! There are lots of expressions that cannot be written as a perfect square

Make a square

When we square a number we can show this in a picture, it makes a square!



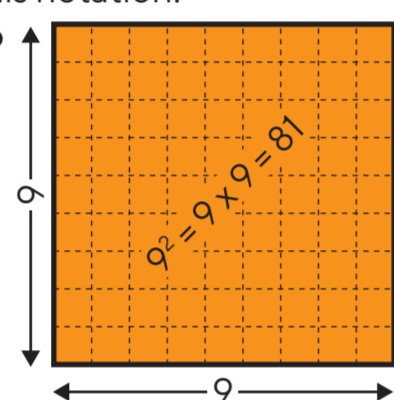
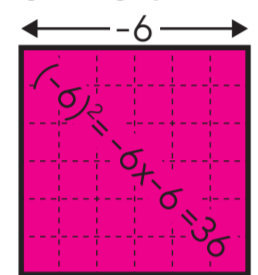
Squaring a number

When we square a number, we multiply by itself.

$$5 \times 5 = 25 \text{ or } 9 \times 9 = 81 \text{ or } -6 \times -6 = 36$$

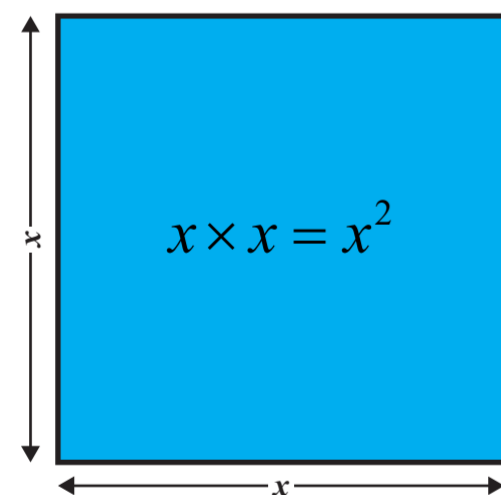
We use a superscript 2 to be the symbol for this operation. René Descartes developed this notation.

$$5^2 = 25 \text{ or } 9^2 = 81 \text{ or } (-6)^2 = 36$$



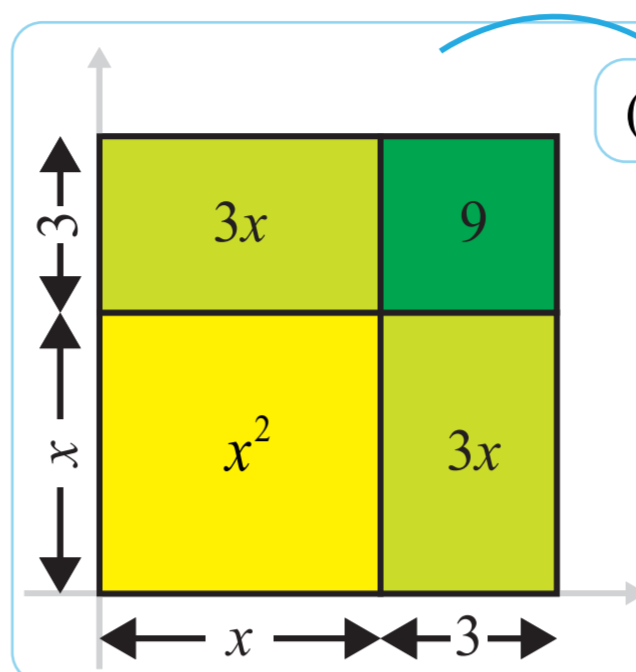
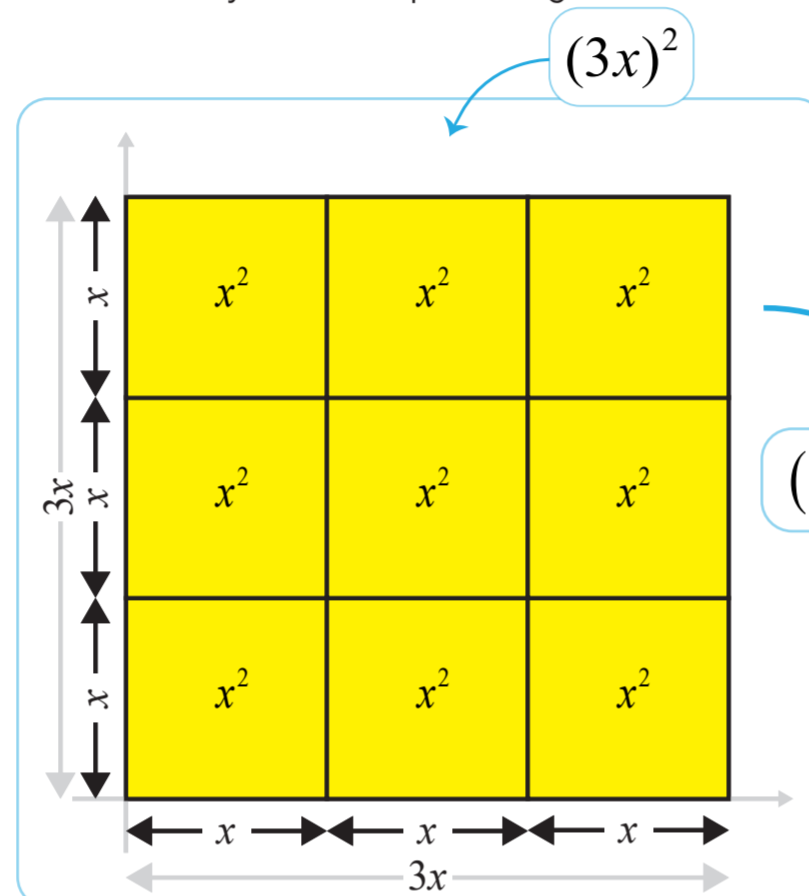
Squaring an unknown

When we square a number, we don't know yet we use a letter to represent this number. It could be any letter from any alphabet, quite often it's x , thanks to Descartes again for this!

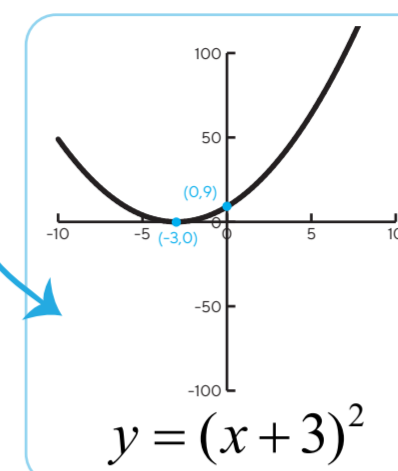


Squaring an expression

Pretty much anything can be squared. And we can always draw a square diagram to show it.



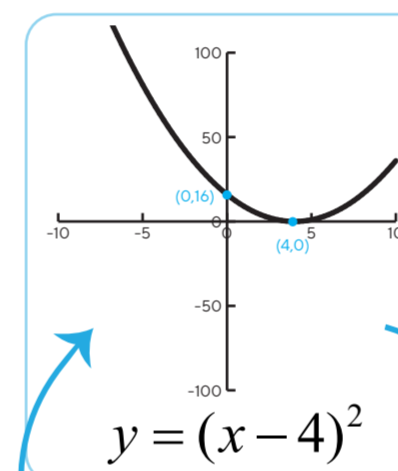
$$(x+3)^2 = x^2 + 6x + 9$$



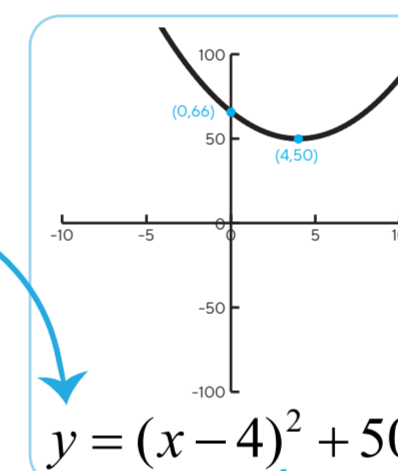
The curve touches the x axis at -3 . Can you think why?

Translations #1

When the graph of a perfect square quadratic function is drawn, it is a translation in the x direction.



What's **different**? Why?
 What's the **same**? Why?



$$(x-4)^2 = x^2 - 8x + 16$$

Completing the square

When an expression can't be written as a perfect square

$$(x-4)^2 = x^2 - 8x + 17$$

This expression is almost a **perfect square**, but we need to add 1 to the left side of expression for it to be identical.

$$(x-4)^2 + 1 = x^2 - 8x + 17$$

When we can take a quadratic expression and write it in this form, we call it **completing the square**.

$$(x+p)^2 + q$$

Perfectly Square

Anything that can be written as something squared is called a **perfect square**. All of these are **perfect squares**:

$$(x+3)^2 \quad (3x)^2 \quad (x-4)^2$$

$$7^2 \quad (x+y+12-5z)^2$$

Quadratics!

An expression which has unknowns to a highest power of 2, and maybe some unknowns and possibly a constant, is called a Quadratic. No other powers allowed.

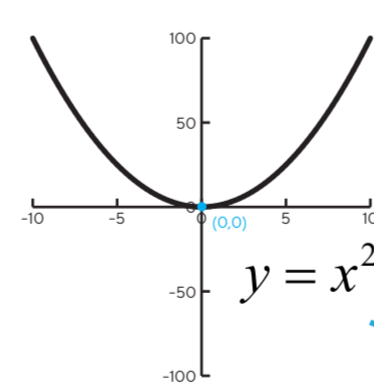
These are all quadratic expressions:

$$(x+3)^2 \quad 12 - r^2 + 3r \quad x^2 + 42$$

$$(t-10)^2 - 5 \quad x^2 \quad p^2 + p - 12$$

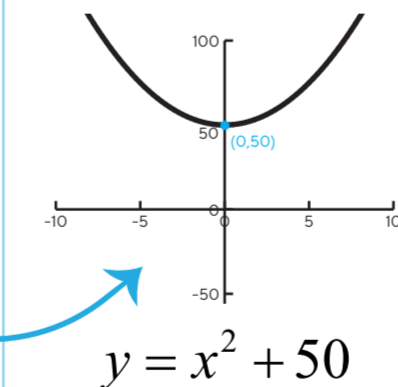
Plot it!

Plotting the simplest quadratic...



Huh?

What's **different**? Why?
 What's the **same**? Why?

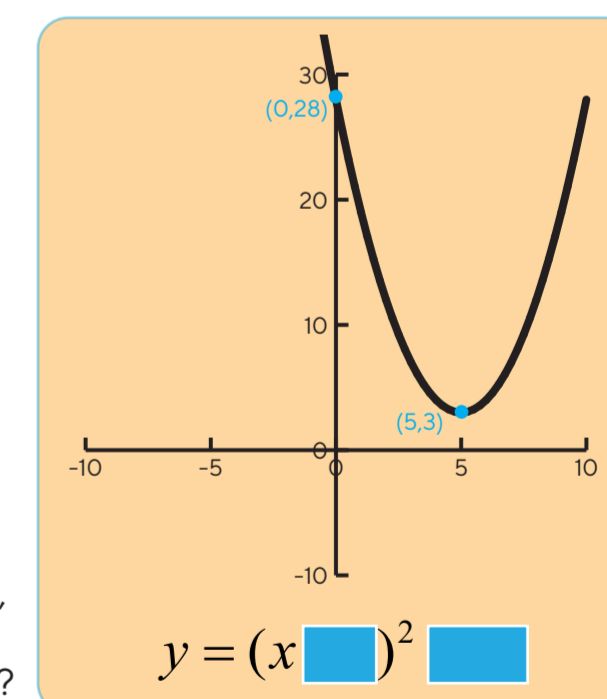


Translations #2

What has caused the vertical translation in the y direction? Can you see?

What is it?

By looking at the graph to the right, can you determine it's equation. What goes in the blue boxes below?



Answer: $y = (x-5)^2 + 3$

There is more to Mathematics than you think... visit rhgmc-mspw.cymru to find out more.

Level 2 Additional Maths can be studied during key stage four.

In key stage five **A Level Mathematics** is the most popular¹ A-level and **A Level Further Mathematics** is the perfect accompaniment.

The Mathematics Support Programme Wales (MSPW) is here to support **students**, **teachers** and **departments** across Wales in enriching and developing their Mathematical domain across all key stages.

Enrichment + Professional Learning + Tuition + Resources + Research



[youtube.com/c/RhGMBCFMSPW](https://www.youtube.com/c/RhGMBCFMSPW)



rhgmc-mspw@swansea.ac.uk



[@RhGMC_MSPW](https://twitter.com/RhGMC_MSPW)



Rheolir gan Brifysgol Abertawe, Selyddiad Gwyddorau Cyfrifiadurol a Mathemategol Cymru
 Managed by Swansea University, Wales Institute of Mathematical and Computational Sciences



rhgmc-mspw.cymru

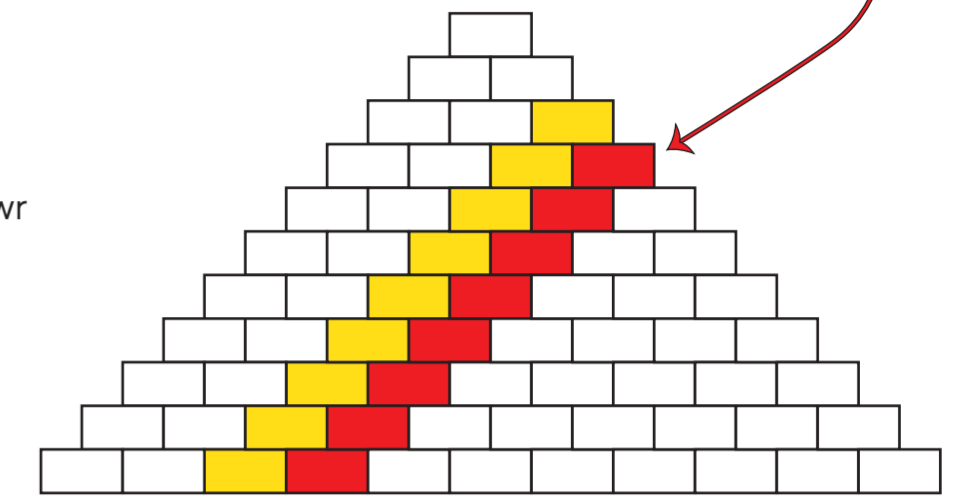
Triongl Al-Karaji

Pwy wyddai!

O fewn y triongl syml hwn roedd llawer o ryfeddodau mathemategol.


Dyma rai yn unig...

Y Rhifau Tetrahedrol
Yn y brics coch y mae'r rhifau tetrahedrol yn byw. Allwch chi lunio'r patrwm maen nhw'n ei wneud?



Y Rhifau Triongl

Os dilynwch y brics melyn i lawr trwy bob haen, Mae'n datgelu'r rhifau trionglog.

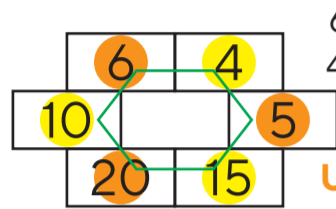


Ydych chi'n gwybod pam eu bod yn cael eu galw'n rhifau trionglog? Edrychwch ar y patrwm hwn

Ysgrifennodd y mathemategydd Persiaidd **Al-Karaji** lyfr yn manylu ar fformwleiddiad cyntaf y triongl hwn yn y 10fed ganrif. Mae mathemategwyr eraill o wahanol ddiwyllionau hefyd wedi ysgrifennu am y triongl hwn, gan gynnwys y mathemategydd Persiaidd **Omar Khayyam** a'r mathemategydd Tsieineaidd **Jia Xian** yn yr 11fed ganrif. Yn niwylliant y Gorllewin, **Blaise Pascal** oedd y mathemategydd Ffrengig y mae'r triongl hwn yn aml yn cael ei enwi ar ei ôl. Gyda 1 yn yr holl frics ar yr ochrau sy'n goleddu, mae pob un o'r brics eraill yn swm y ddwy fricsen sy'n cyffwrdd a'i ymyl uchaf. **Pa werth ddylai fod yn y fricsen?**

Hecsgonau

Cyfrifwch luoswm fertigau eiledol unrhyw hecsgon o fewn Triongl Al-Karaji.



Unrhyw beth diddorol?

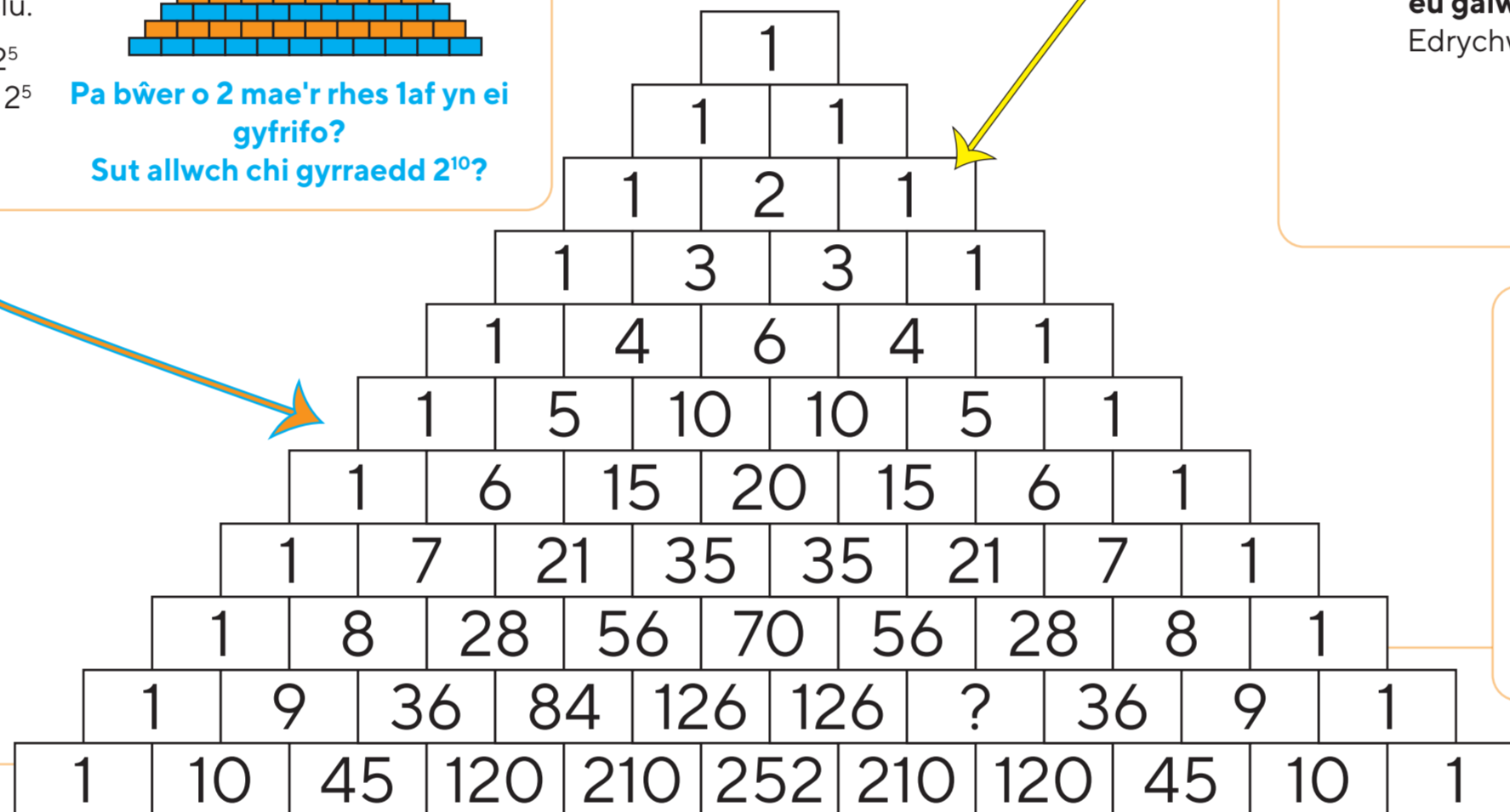
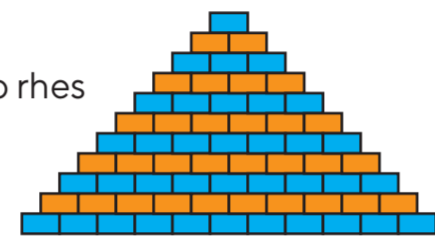
$6 \times 5 \times 20 = ?$
 $4 \times 15 \times 10 = ?$

Pwerau dau

Os ydych chi'n cyfrifo cyfanswm pob rhes mae set arbennig o rifau yn cael ei ddatgelu.

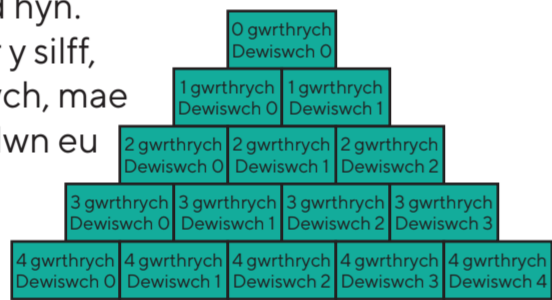
Mae'r 6ed rhes yn cyfrif 2^5
 $1 + 5 + 10 + 10 + 5 + 1 = 32 = 2^5$

Pa bŵer o 2 mae'r rhes 1af yn ei gyfrifo?
Sut allwch chi gyrraedd 2^{10} ?



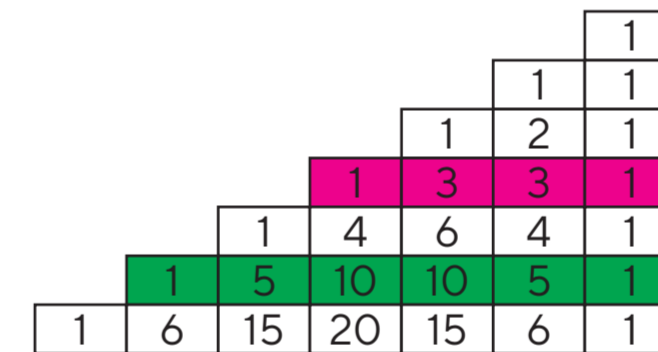
Cyfuniadeg

Os oes gennym set o wrthrychau a'ch bod yn dymuno dewis rhai ohonynt, mae'r triongl hyn yn dweud wrthych faint o ffyrdd posibl sydd i wneud hyn. E.e. Os oes gennych 4 llyfr ar y silff, rwy'n dewis unrhyw 2 heb edrych, mae 6 pâr gwahanol o lyfrau y gallwn eu dewis.



Os oes gennych 6 llyfr ac yn dymuno dewis 3 ohonynt, faint o gyfuniadau gwahanol sydd yna?

10^6 10^5 10^4 10^3 10^2 10^1 10^0



Pwerau 11

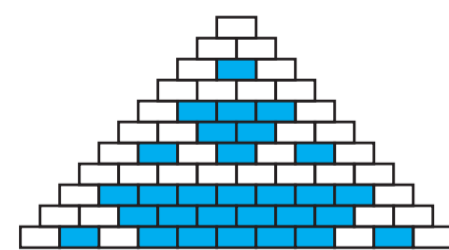
Aliniwch y brics i'r dde yn y triongl. Mae pob rhes yn rhoi pŵer i chi o 11... $11^0 = 1$, $11^1 = 11$, $11^2 = 121$ etc.,

Beth yw 11^3 ?

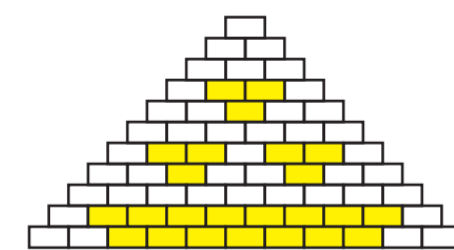
Allwch chi gyfrif 11^5 ? Bydd yn ofalus!

Lluosrifau

Os ydych chi'n tywyllu holl luosrifau 2



Os ydych chi'n tywyllu holl luosrifau 3



Pa batrymau ydych chi'n eu creu gyda luosrifau eraill? Rhowch gynnig ar 4, 5, 6, 7,

Binomialau

Gelwir mynegiad algebraidd gyda 2 ran yn binomial. Os caiff ei godi i wahanol bwerau cyfanrif, gallwn ddefnyddio triongl Al-Karaji i'n helpu i bennu'r cyfernodau.

$(x + y)^0 = 1$

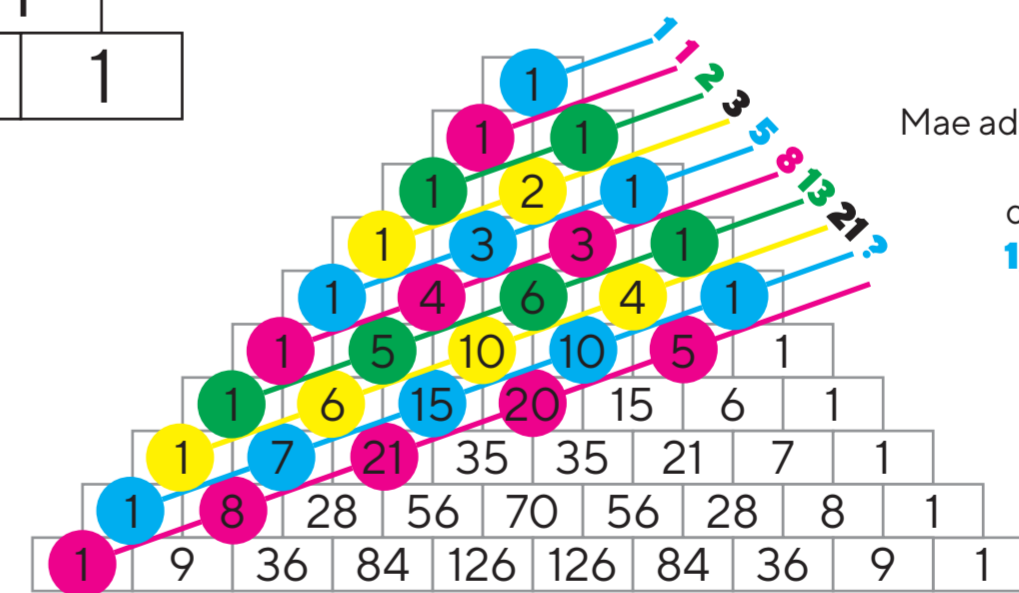
$(x + y)^1 = 1x + 1y$

$(x + y)^2 = 1x^2 + 2xy + 1y^2$

$(x + y)^3 = 1x^3 + 3x^2y + 3xy^2 + 1y^3$

$(x + y)^4 = 1x^4 + ___ + ___ + ___ + 1y^4$

Allwch chi ehangu'r binomial i bŵer 4 gan ddefnyddio'r triongl i'ch helpu?



Fibonacci

Mae adio ar hyd y croesliniau lliw hyn rhoi'r rhifau yn y dilyniant Fibonacci i chi **1, 1, 2, 3, 5, 8, 13, 21, ...**

Beth sydd nesaf? A oes unrhyw ffordd arall o benderfynu ar y rhif nesaf?

Mae mwy i Fathemateg nag ydych chi'n feddwl.... ymwelwch â rhgmc-mspw.cymru i ddarganfod mwy.

Gellir astudio **Lefel 2 Mathemateg Ychwanegol** yn ystod cyfnod allweddol pedwar.

Yng nghyfnod allweddol pump **Safon Uwch Mathemateg** yw'r **Safon Uwch** mwyaf poblogaidd¹ a **Mathemateg Bellach Safon Uwch** yw'r cydymaith perffaith.

Mae Rhaglen Gymorth Mathemateg Cymru (RhGMC) yma i gefnogi myfyrwyr, athrawon ac adrannau ledled Cymru wrth gyfoethogi a datblygu eu parth Mathemategol ar draws pob cyfnod allweddol.

Cyfoethogi + Dysgu Proffesiynol + Hyfforddiant + Adnoddau + Ymchwil



[youtube.com/c/RhGMBFCMSPW](https://www.youtube.com/c/RhGMBFCMSPW)

rhgmc-mspw@swansea.ac.uk

[@RhGMC_MSPW](https://twitter.com/RhGMC_MSPW)



Rheolir gan Brifysgol Abertawe, Selyddiad Gwyddorau Cytrifadurol a Mathemategol Cymru
Managed by Swansea University, Wales Institute of Mathematical and Computational Sciences



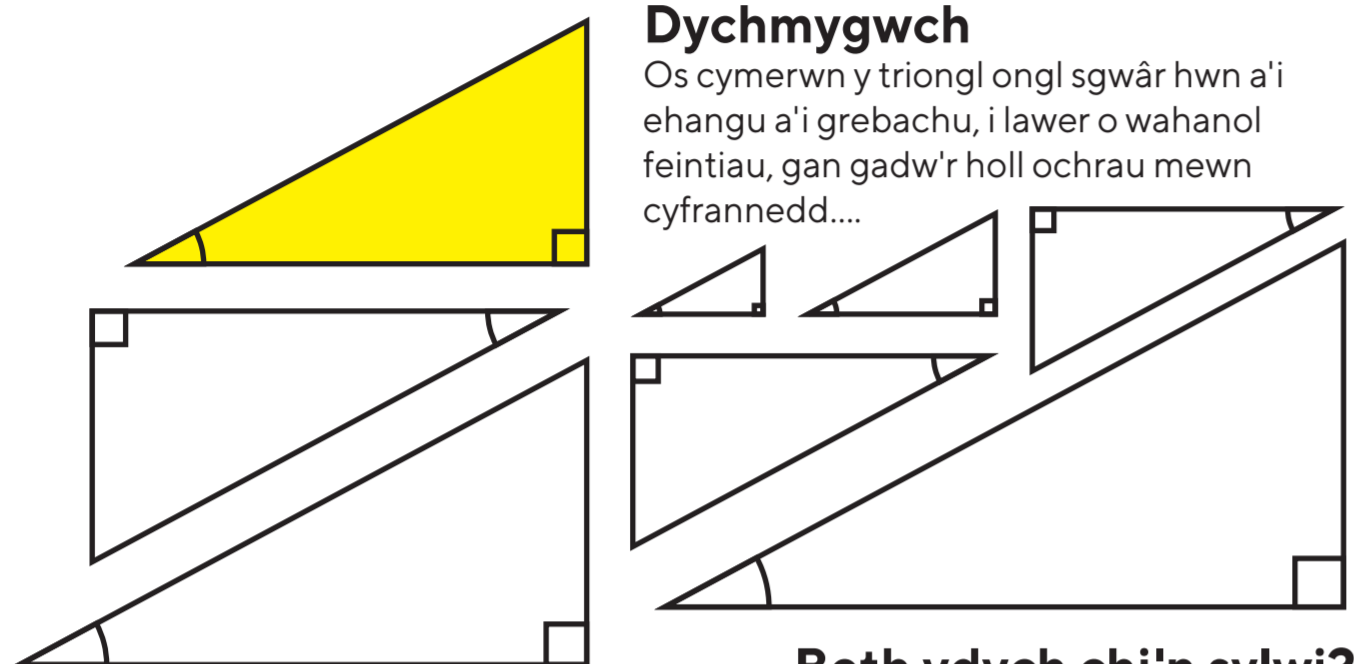
rhgmc-mspw.cymru

Trigonometreg

Mae'r gair **trigonometreg** wedi esblygu o **trigonon** sy'n golygu tair (tri) ongl (gon) a **metria** sy'n golygu mesur.

Dychmygwch

Os cymerwn y tri ongl ongl sgwâr hwn a'i ehangu a'i grebachu, i lawer o wahanol feintiau, gan gadw'r holl ochrau mewn cyfrannedd....

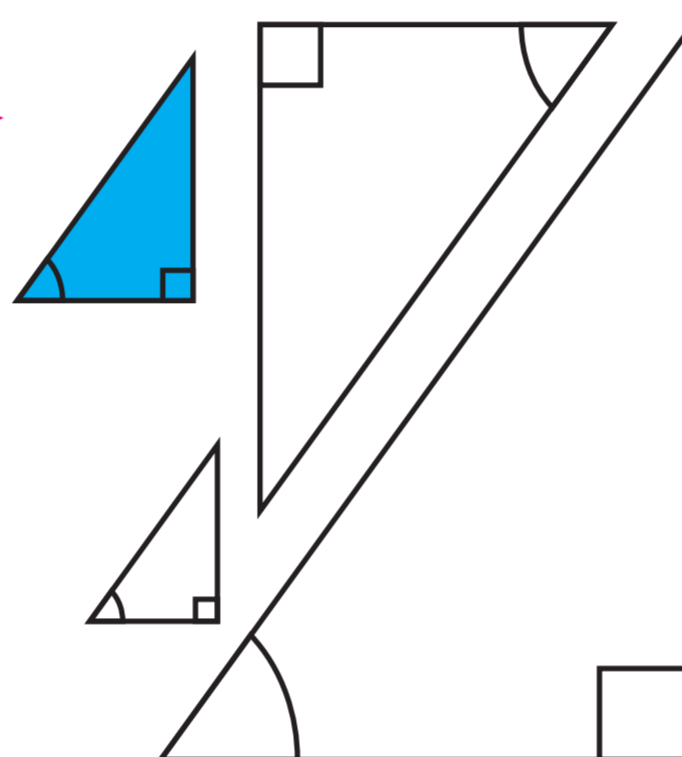


Beth ydych chi'n sylwi?

Oeddech chi'n sylwi bod yr holl onglau wedi aros yr un fath?

Ongl wahanol...?

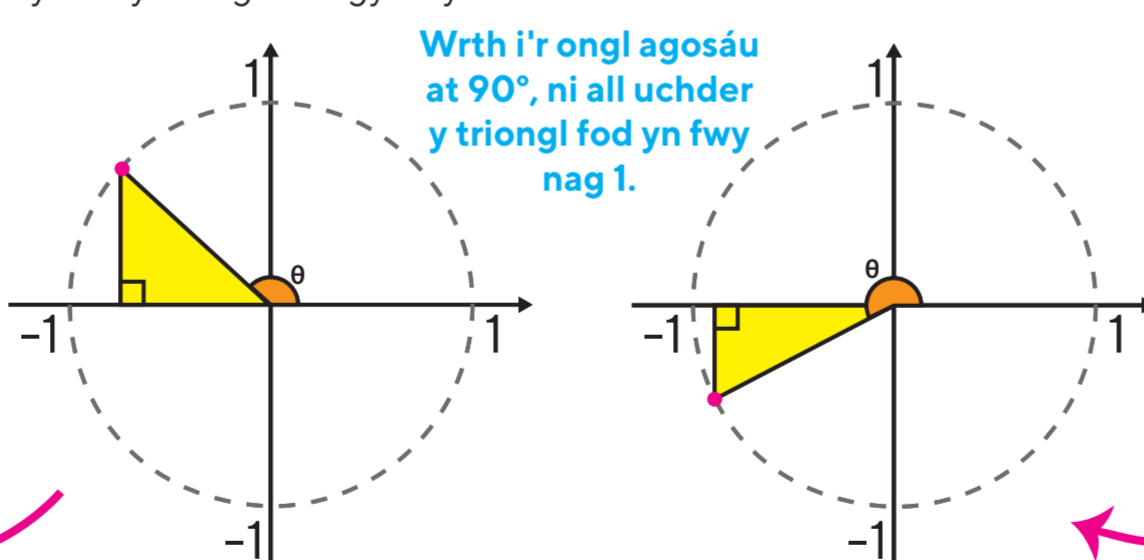
Os ydym yn newid maint yr ongl wreiddiol yn y tri ongl, ac yn gwneud mwy o ehangiadau, eto mae'r ongl yn aros yr un fath ym mhob un o'r tri onglau newydd rydyn ni'n eu creu.



Os yw Sin, yn ymwneud â'r ochrau cyferbyn a hypotenws, sut ydych chi'n meddwl bod Cos(in) a Tan(giad) yn gysylltiedig?

Yn fwy na 90 °?

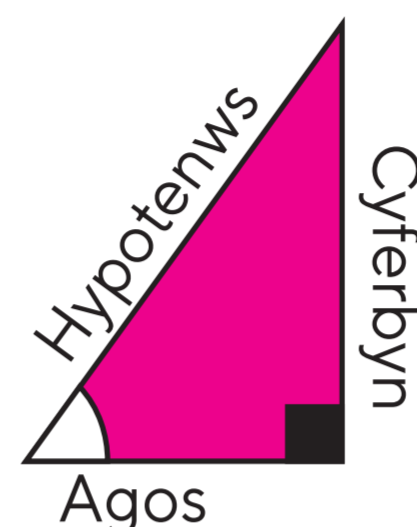
Os ydym yn tynnu ein tri onglau mewn cylch uned, (yn aml, ym mathemateg mae **uned** yn air a ddefnyddir ar gyfer 1, felly mae gan **gylch uned** radiws o 1). Gan fod yr hypotenws yn 1, mae uchder y tri ongl yn cynrychioli cymhareb y cyferbyn a'r hypotenws. Os ydym yn diffinio'r ongl fel bob amser yn cael ei mesur o'r echelin llorweddol positif, gallwn symud y tri ongl o amgylch y tardd.



Wrth i'r ongl agosáu at 90°, ni all uchder y tri ongl fod yn fwy nag 1.

Rhowch enw iddyn nhw!

Mae enwi'r ochrau, yn ddibynnol ar ble maen nhw mewn perthynas â'r ongl, yn ein helpu ni i gyfrifo pethau.

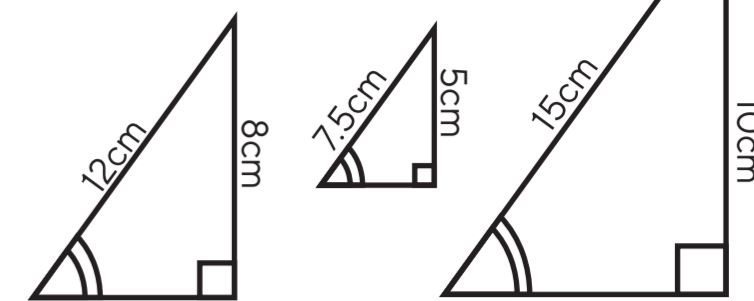


Mae'r ochr agos nesaf i'r ongl dan sylw.

Felly

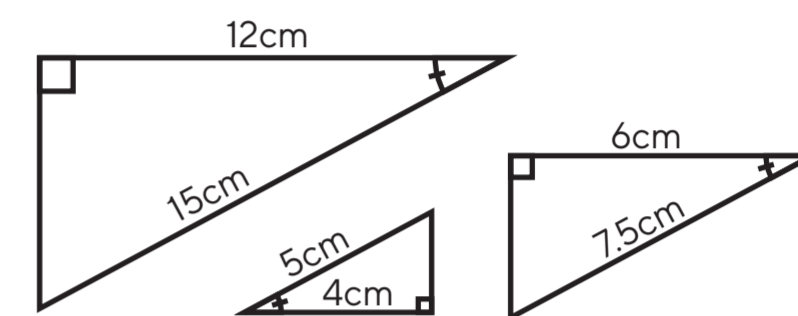
Pan fydd yr ongl yn aros yr un fath, mae'r holl ochrau'n aros yn yr un cyfrannedd.

Ym mhob un o'r tri thri ongl hyn, rhannwch y Cyferbyn â'r Hypotenws.



$\frac{\text{Cyferbyn}}{\text{Hypotenws}} = \frac{8}{12} = \frac{2}{3}$ $= \frac{5}{7.5} = \frac{2}{3}$ $= \frac{10}{15} = \frac{2}{3}$

Ym mhob un o'r tri thri ongl hyn, rhannwch yr Agos â'r Hypotenws.



$\frac{\text{Agos}}{\text{Hypotenws}} = \frac{12}{15} = \frac{4}{5}$ $= \frac{4}{5}$ $= \frac{6}{7.5} = \frac{4}{5}$

Ar gyfer unrhyw ongl benodol

Mae'r gymhareb o unrhyw ddwy ochr bob amser yr un fath. Mae hyn oherwydd pan fydd yr ongl yn sefydlog rydym yn gwybod bod yr holl dri onglau yn gyflun, ac felly mae'n rhaid i'r ochrau fod mewn cyfrannedd.

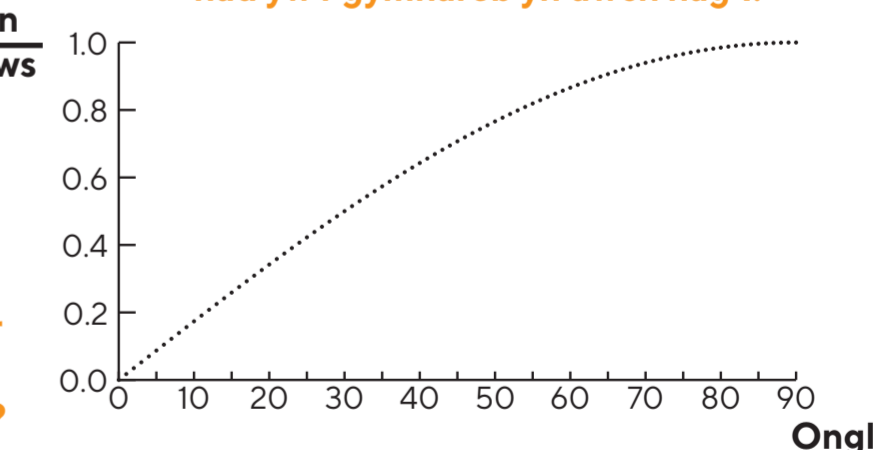
Pan fyddwn yn darganfod cymhareb unrhyw ddwy ochr ar gyfer ongl sefydlog, byddwn bob amser yn cael yr un ateb. Os byddwn yn newid yr ongl bydd y gymhareb yn newid.

Gadewch i ni ei blotio

Os tynnwn graff o'r onglau gwahanol ar yr echelin llorweddol a chymhareb y cyferbyn a'r hypotenws ar yr echelin fertigol, fe gawn:

$\frac{\text{Cyferbyn}}{\text{Hypotenws}}$

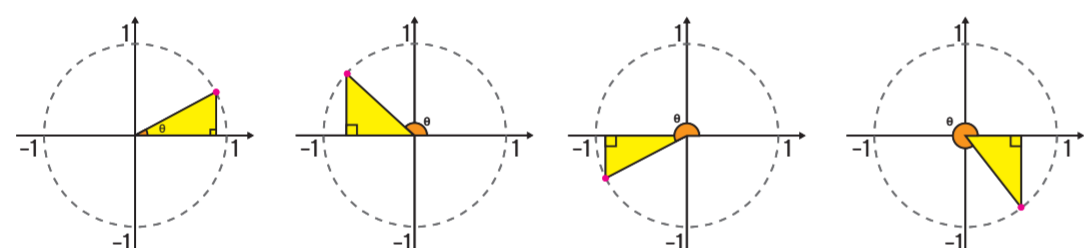
Wrth i'r ongl agosáu at 90°, ymddengys nad yw'r gymhareb yn uwch nag 1.



Beth ydych chi'n meddwl sy'n digwydd i'r graff gydag onglau dros 90°? A fyddai'n dal i fod yn dri ongl ongl sgwâr?

360° a thu hwnt

Gallwn barhau i gynyddu'r ongl a symud y tri ongl o amgylch y tardd, os ydym yn parhau i blotio uchder y tri ongl y mae'r graff isod yn cael ei lunio.



Beth ydych chi'n meddwl sy'n digwydd wrth i'r ongl fod yn fwy na 360°?

Y Don Sin

sin cos tan

Gelwir y ffwythiant hwn yn ffwythiant Sin. Mae'n mynd ymlaen am byth, wrth i chi barhau o gwmpas ac o amgylch y cylch. Yn ffodus, mae gennym fotwm ar y cyfrifiannell sy'n storio'r graff hwn ac yn penderfynu ei werthoedd pan fydd eu hangen arnom.



Mae mwy i Fathemateg nag ydych chi'n feddwl.... ymwelwch â rhgmc-mspw.cymru i ddarganfod mwy.

Gellir astudio **Lefel 2 Mathemateg Ychwanegol** yn ystod cyfnod allweddol pedwar.

Yng nghyfnod allweddol pump **Safon Uwch Mathemateg** yw'r Safon Uwch mwyaf poblogaidd¹ a **Mathemateg Bellach Safon Uwch** yw'r cydymaith perffaith.

Mae Rhaglen Gymorth Mathemateg Cymru (RhGMC) yma i gefnogi myfyrwyr, athrawon ac adrannau ledled Cymru wrth gyfoethogi a datblygu eu parth Mathemategol ar draws pob cyfnod allweddol.



[youtube.com/c/RhGMBFCFMSPW](https://www.youtube.com/c/RhGMBFCFMSPW)

rhgmc-mspw@swansea.ac.uk

[@RhGMC_MSPW](https://twitter.com/RhGMC_MSPW)



Rheolir gan Brifysgol Abertawe, Selyddiad Gwyddorau Cyfrifiadurol a Mathemategol Cymru
Managed by Swansea University, Wales Institute of Mathematical and Computational Sciences



rhgmc-mspw.cymru

Quadrare

Quadrare

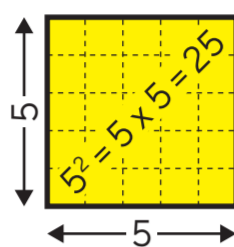
Mae'n air Lladin sy'n golygu 'i wneud yn sgwâr', dyma ble mae'r geiriau **cwadratig**, **cwadriceps**... yn dod o.
Allwch chi feddwl am fwy o eiriau cwad?

Nid yw popeth yn berffaith.

Yn union fel yn y byd go iawn, ni all popeth ym mathemateg fod yn berffaith - er bod llawer o fathemateg yn eithaf da! Mae yna lawer o fynegiadau na ellir eu hysgrifennu fel sgwâr perffaith

Llunio sgwâr

Pan fyddwn yn sgwario rhif gallwn ddangos hyn mewn llun, mae'n gwneud sgwâr!



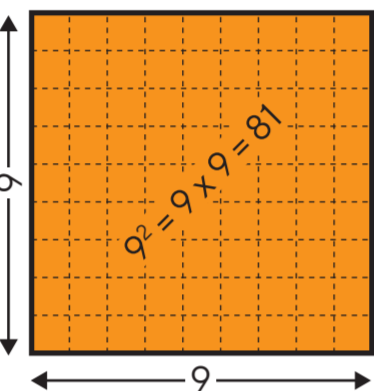
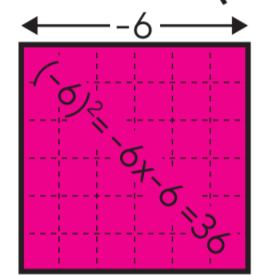
Sgwario rhif

Pan fyddwn yn sgwario rhif, rydym yn ei luosi ag ef ei hun.

$5 \times 5 = 25$ or $9 \times 9 = 81$ or $-6 \times -6 = 36$

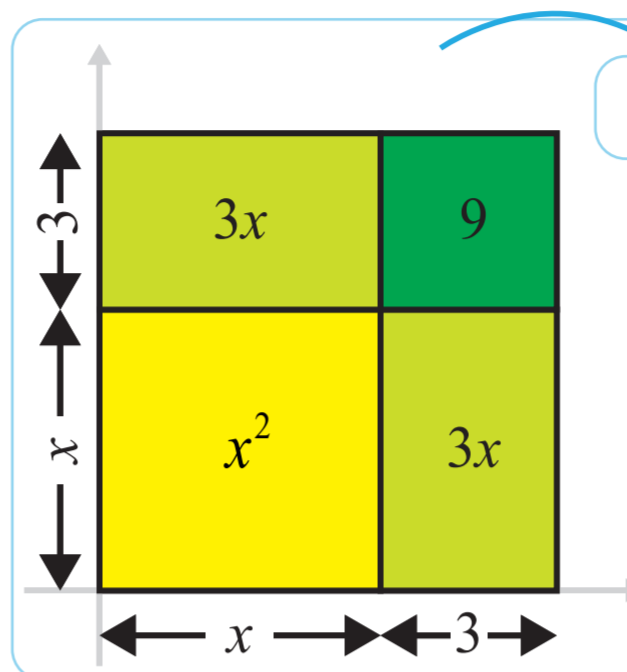
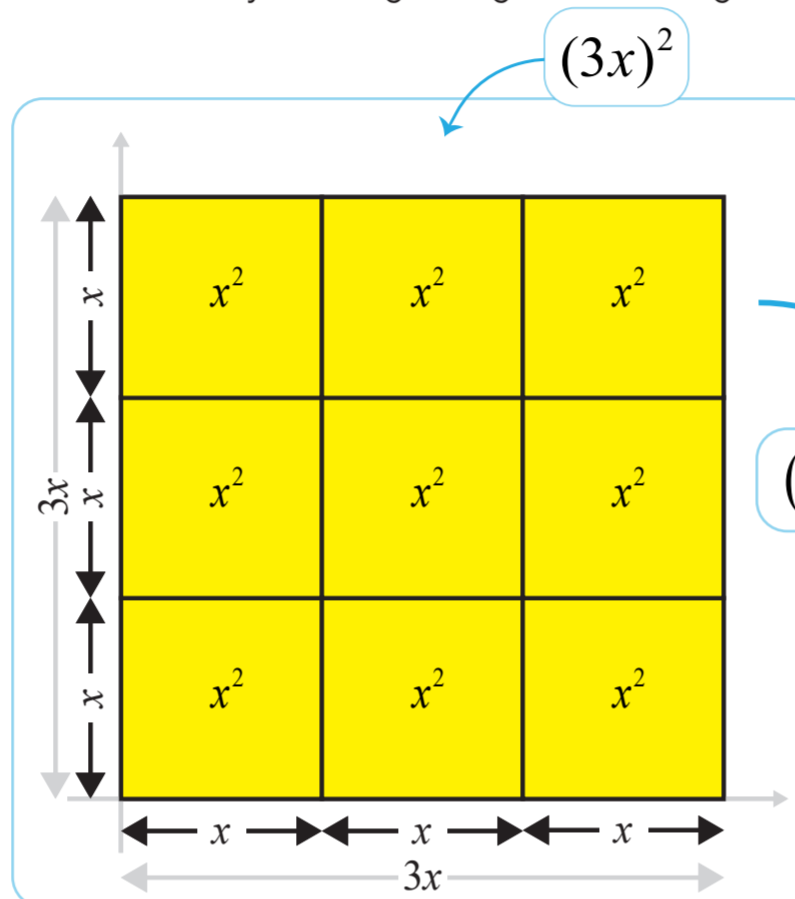
Rydym yn defnyddio uwchysgrif 2 i fod yn symbol ar gyfer y gweithrediad hwn. Datblygodd René Descartes y nodiant hwn.

$5^2 = 25$ neu $9^2 = 81$ neu $(-6)^2 = 36$

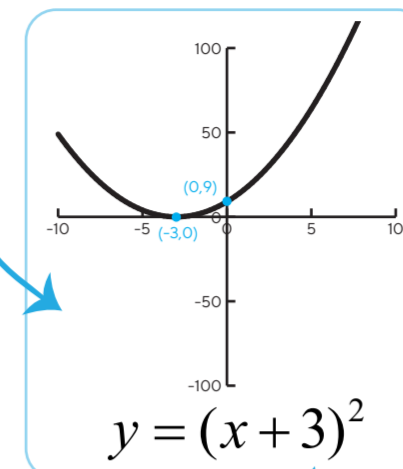


Sgwario mynegiad

Gall bron iawn unrhyw beth gael ei sgwario. A gallwn bob amser dynnu diagram sgwâr i'w ddangos.



$(x+3)^2 = x^2 + 6x + 9$

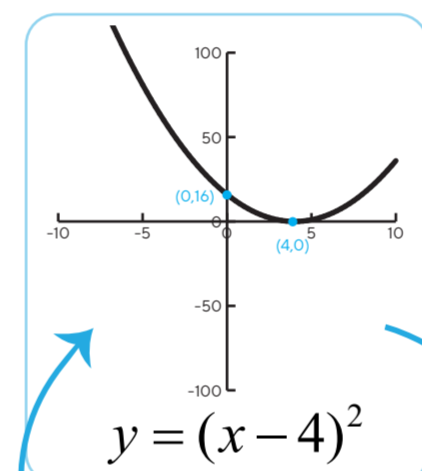
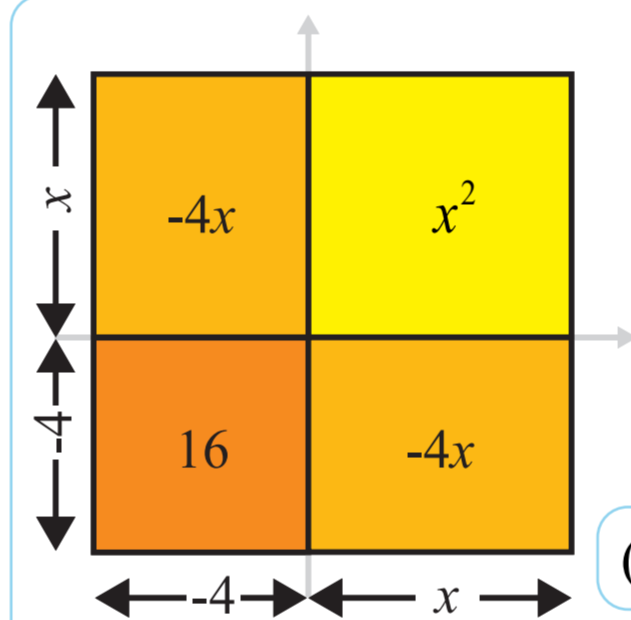


Mae'r gromlin yn cyffwrdd â'r echelin x yn -3. Allwch chi feddwl pam?

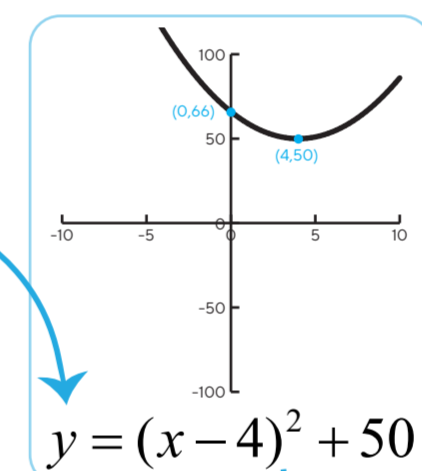
Trawsfudiadau #1

Pan fydd graff ffwythiant cwadratig sgwâr perffaith yn cael ei lunio, mae'n drawsffudiad yn y cyfeiriad x.

$(3x)^2 = 9x^2$



Beth sy'n wahanol? Pam? Beth sydd yr un peth? Pam?



$(x-4)^2 + 1 = x^2 - 8x + 17$

Pan allwn gymryd mynegiad cwadratig a'i ysgrifennu yn y ffurf hon, rydym yn ei alw'n **cwblhau'r sgwâr**.

$(x+p)^2 + q$

Yn Berffaith Sgwâr

Mae unrhyw beth y gellir ei ysgrifennu fel rhywbeth wedi'i sgwario yn cael ei alw'n **sgwâr perffaith**. Mae'r rhain i gyd yn **sgwariau perffaith**:

$(x+3)^2$ $(3x)^2$ $(x-4)^2$
 7^2 $(x+y+12-5z)^2$

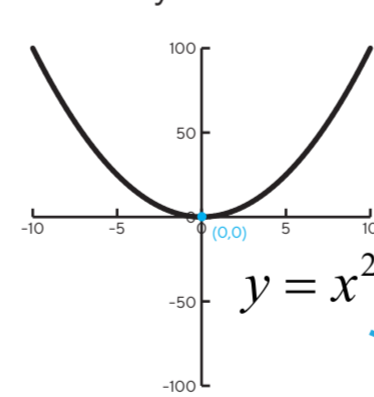
Cwadratigau!

Gelwir mynegiad sydd ag anhysbysion i bŵer uchaf o 2, ac efallai rhai anhysbysion, ac o bosibl cysonyn, yn gwadratig. Ni chaniateir unrhyw bŵerau eraill. Mae'r rhain i gyd yn fynegiadau cwadratig:

$(x+3)^2$ $12-r^2+3r$ x^2+42
 $(t-10)^2-5$ x^2 p^2+p-12

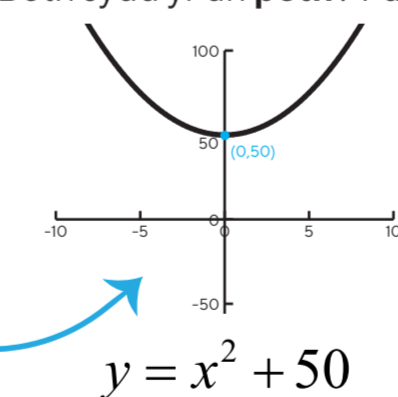
Plotiwch e!

Plotio'r cwadratig symlaf...



Huh?

Beth sy'n wahanol? Pam? Beth sydd yr un peth? Pam?

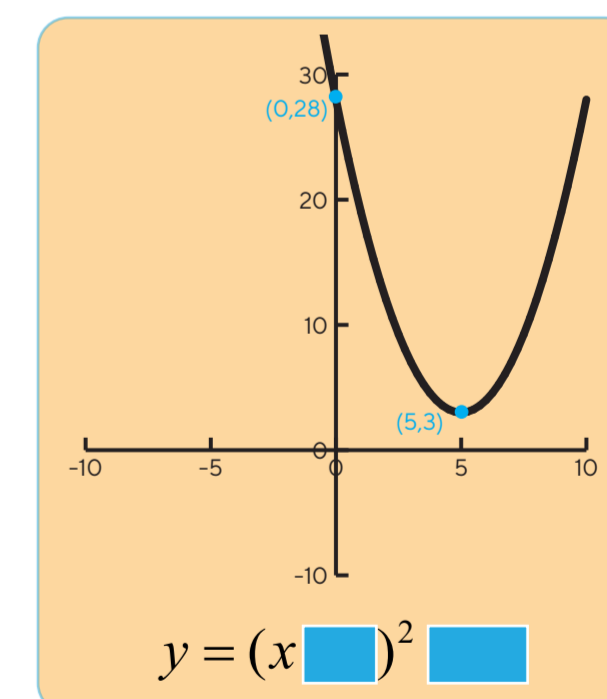


Trawsfudiadau #2

Beth sydd wedi achosi'r trawsffudiad fertigol yn y cyfeiriad y? Wyt ti'n gallu gweld?

Beth yw e?

Trwy edrych ar y graff i'r dde, a allwch chi benderfynu ei hafaliad. Beth sy'n mynd yn y blychau glas isod?



Atelb $y = (x-5)^2 + 3$

Mae mwy i Fathemateg nag ydych chi'n feddwl.... ymwelwch â rhgmc-mspw.cymru i ddarganfod mwy.

Gellir astudio **Lefel 2 Mathemateg Ychwanegol** yn ystod cyfnod allweddol pedwar.

Yng nghyfnod allweddol pump **Safon Uwch Mathemateg** yw'r **Safon Uwch mwyaf poblogaidd** a **Mathemateg Bellach Safon Uwch** yw'r cydymaith perffaith.

Mae Rhaglen Gymorth Mathemateg Cymru (RhGMC) yma i gefnogi myfyrwyr, athrawon ac adrannau ledled Cymru wrth gyfoethogi a datblygu eu parth Mathemategol ar draws pob cyfnod allweddol.



[youtube.com/c/RhGMBFCFMSPW](https://www.youtube.com/c/RhGMBFCFMSPW)

rhgmc-mspw@swansea.ac.uk

[@RhGMC_MSPW](https://twitter.com/RhGMC_MSPW)



Rheolir gan Brifysgol Abertawe, Selyddiad Gwyddorau Cytrifadurol a Mathemategol Cymru
Managed by Swansea University, Wales Institute of Mathematical and Computational Sciences



rhgmc.mspw.cymru